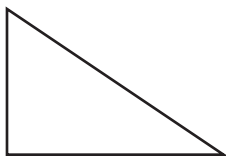


Name _____

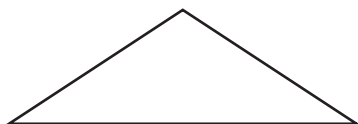
Triangles

Classify each triangle by its sides and then by its angles.

1.



2.

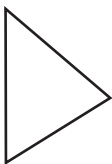


3.

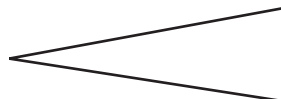


Write the name of each triangle.

4.



5.



6. Which is a triangle with one right angle?

A Equilateral triangle **B** Obtuse triangle **C** Right triangle **D** Acute triangle

7. **Writing to Explain** Why can't a triangle have more than one obtuse angle?
